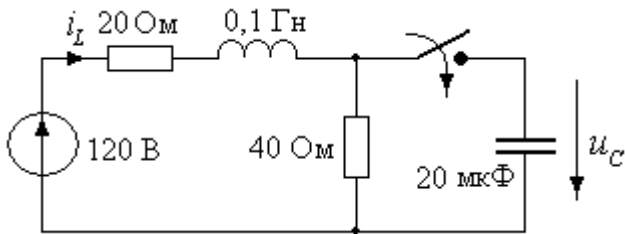


### Контрольная работа №4

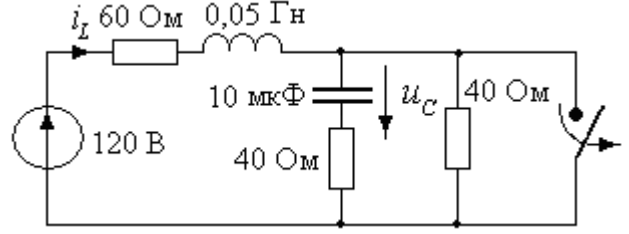
#### ПЕРЕХОДНЫЕ ПРОЦЕССЫ. ОПРЕДЕЛЕНИЕ ЗАВИСИМЫХ НАЧАЛЬНЫХ УСЛОВИЙ

1.



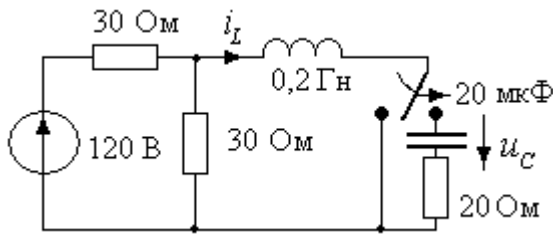
$$\left. \frac{di_L}{dt} \right|_{0_+} = ?, \quad \left. \frac{du_C}{dt} \right|_{0_+} = ?$$

2.



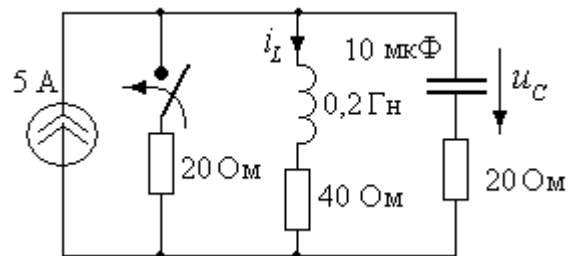
$$\left. \frac{di_L}{dt} \right|_{0_+} = ?, \quad \left. \frac{du_C}{dt} \right|_{0_+} = ?$$

3.



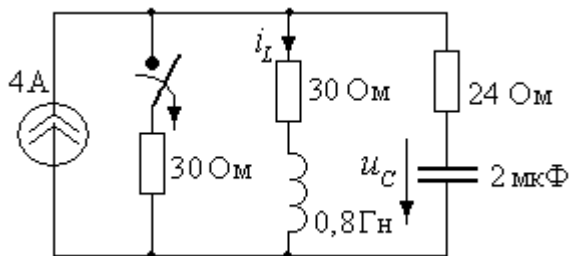
$$\left. \frac{di_L}{dt} \right|_{0_+} = ?, \quad \left. \frac{du_C}{dt} \right|_{0_+} = ?$$

4.



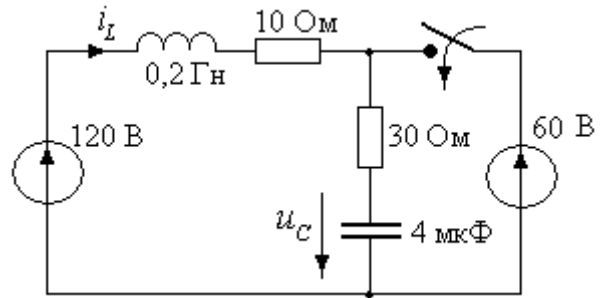
$$\left. \frac{di_L}{dt} \right|_{0_+} = ?, \quad \left. \frac{du_C}{dt} \right|_{0_+} = ?$$

5.



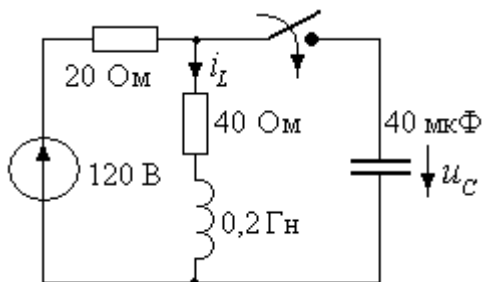
$$\left. \frac{di_L}{dt} \right|_{0_+} = ?, \quad \left. \frac{du_C}{dt} \right|_{0_+} = ?$$

6.



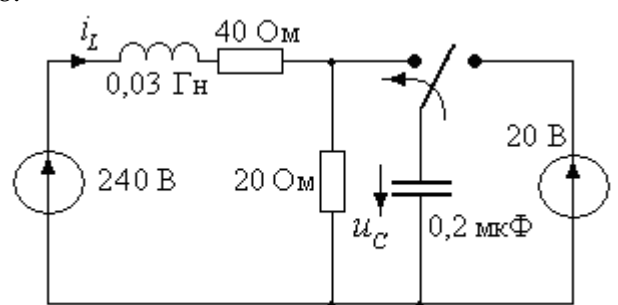
$$\left. \frac{di_L}{dt} \right|_{0_+} = ?, \quad \left. \frac{du_C}{dt} \right|_{0_+} = ?$$

7.



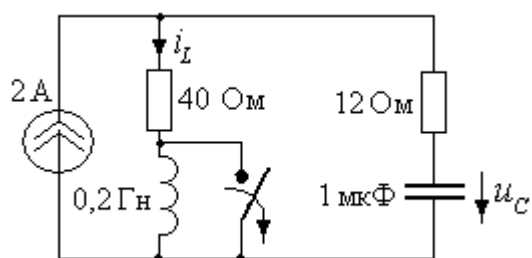
$$\left. \frac{di_L}{dt} \right|_{0_+} = ?, \quad \left. \frac{du_C}{dt} \right|_{0_+} = ?$$

8.



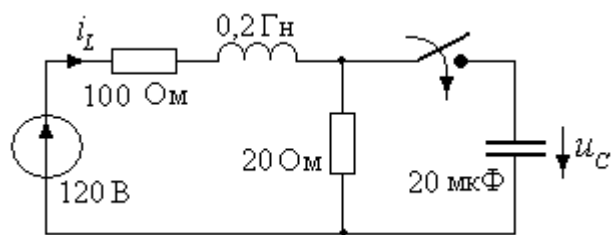
$$\left. \frac{di_L}{dt} \right|_{0_+} = ?, \quad \left. \frac{du_C}{dt} \right|_{0_+} = ?$$

9.



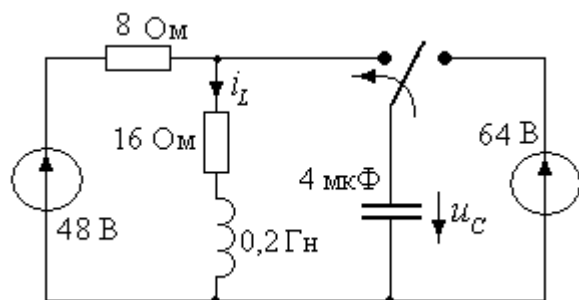
$$\left. \frac{di_L}{dt} \right|_{0_+} = ?, \quad \left. \frac{du_C}{dt} \right|_{0_+} = ?$$

10.



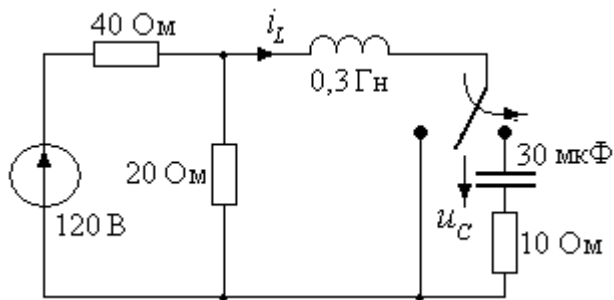
$$\left. \frac{di_L}{dt} \right|_{0_+} = ?, \quad \left. \frac{du_C}{dt} \right|_{0_+} = ?$$

11.



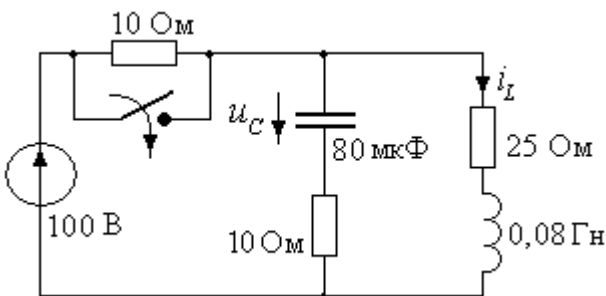
$$\left. \frac{di_L}{dt} \right|_{0_+} = ?, \quad \left. \frac{du_C}{dt} \right|_{0_+} = ?$$

12.



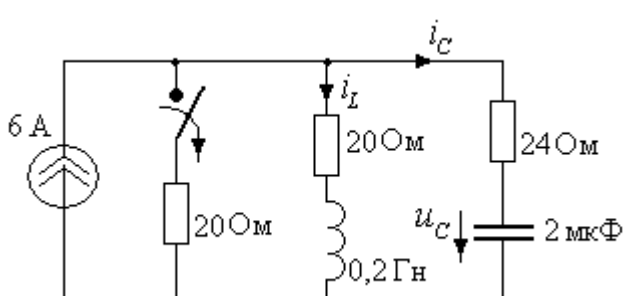
$$\left. \frac{di_L}{dt} \right|_{0_+} = ?, \quad \left. \frac{du_C}{dt} \right|_{0_+} = ?$$

13.



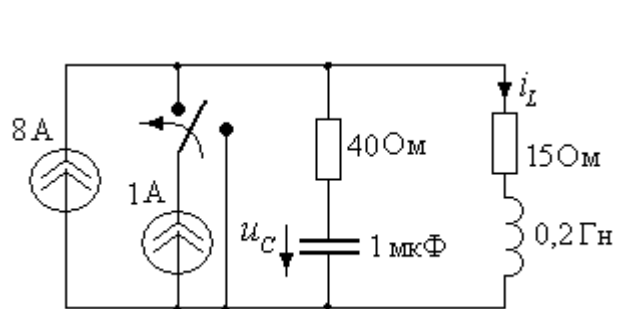
$$\left. \frac{di_L}{dt} \right|_{0_+} = ?, \quad \left. \frac{du_C}{dt} \right|_{0_+} = ?$$

14.



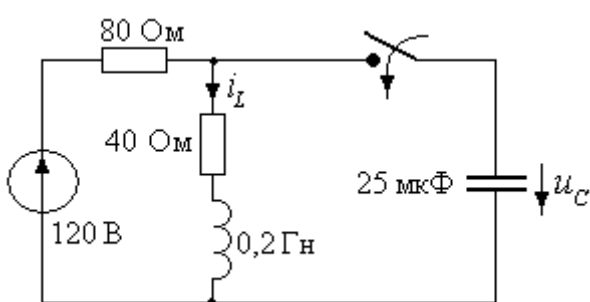
$$\left. \frac{di_L}{dt} \right|_{0_+} = ?, \quad \left. \frac{du_C}{dt} \right|_{0_+} = ?$$

15.



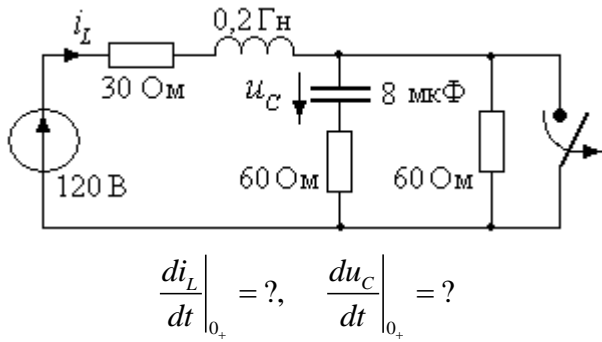
$$\left. \frac{di_L}{dt} \right|_{0_+} = ?, \quad \left. \frac{du_C}{dt} \right|_{0_+} = ?$$

16.

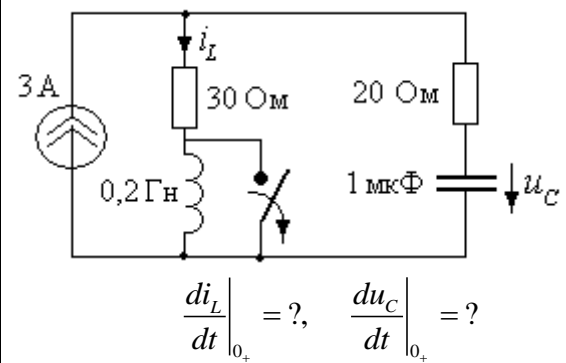


$$\left. \frac{di_L}{dt} \right|_{0_+} = ?, \quad \left. \frac{du_C}{dt} \right|_{0_+} = ?$$

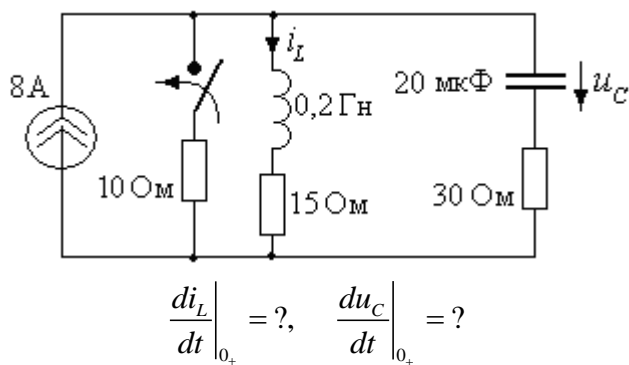
17.



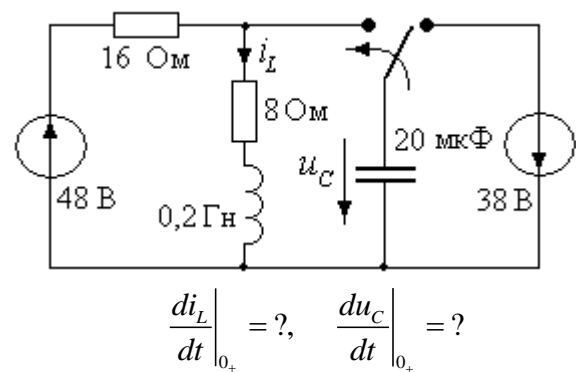
18.



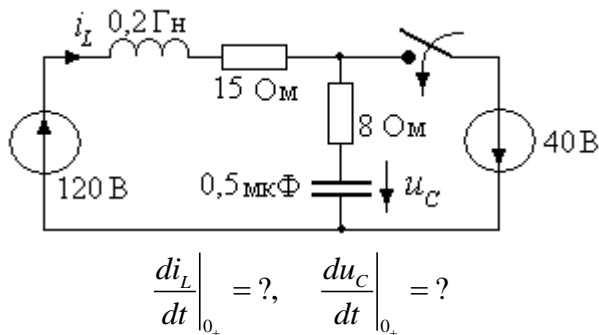
19.



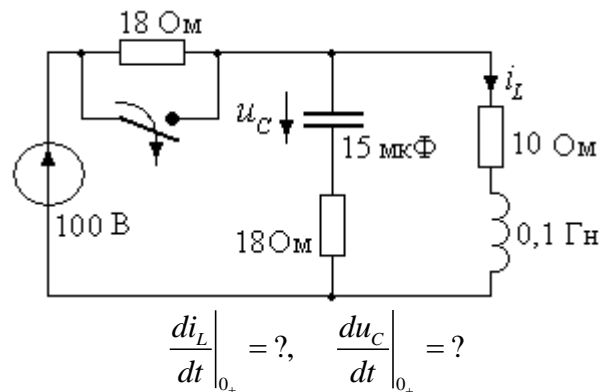
20.



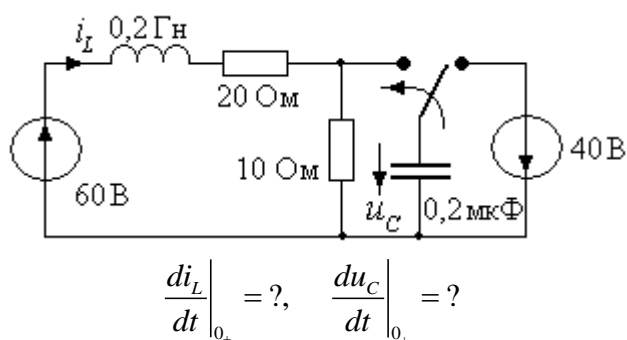
21.



22.



23.



24.

